

Name:

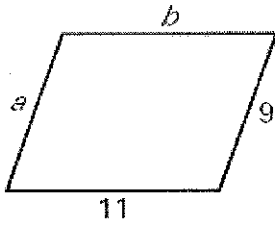
Period:

Date:

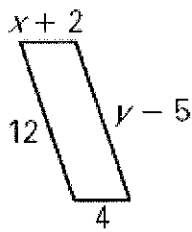
Practice Worksheet:
How do you use properties of parallelograms to solve problems?

Find the value of each variable in the parallelogram.

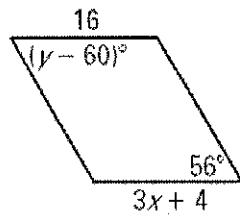
1.



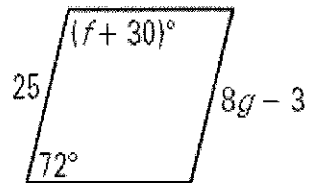
2.



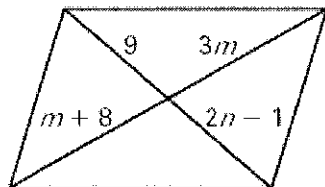
3.



4.



5.



6.

